




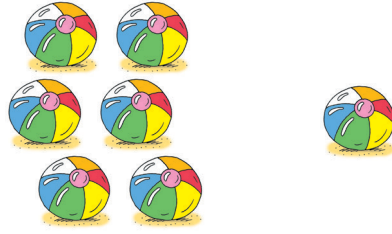


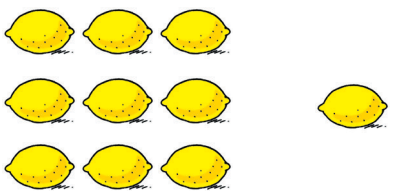


Заповніть пропуски цифрами та шляхом додавання отримайте суму

 <p>_____ + _____ = _____</p>	 <p>_____ + _____ = _____</p>
 <p>_____ + _____ = _____</p>	 <p>_____ + _____ = _____</p>
 <p>_____ + _____ = _____</p>	 <p>_____ + _____ = _____</p>
 <p>_____ + _____ = _____</p>	 <p>_____ + _____ = _____</p>
 <p>_____ + _____ = _____</p>	